






1 taart



2 pakjes




3 ballonen






4 hoedjes



5 kaarsjes



Teken het juiste aantal erbij.

1

2

3

4

5

