


# Optellen t/m 5



$1 + 2 = \dots\dots$



$2 + 2 = \dots\dots$



$3 + 1 = \dots\dots$



$1 + 1 = \dots\dots$




$2 + 3 = \dots\dots$



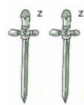
$1 + 0 = \dots\dots$



$\dots\dots + \dots\dots = \dots\dots$



$\dots\dots + \dots\dots = \dots\dots$



$\dots\dots + \dots\dots = \dots\dots$



$\dots\dots + \dots\dots = \dots\dots$