






Tel de stippen en maak de sommen.



$$\begin{array}{r} 3 \\ + 2 \\ \hline 5 \end{array}$$



$$\begin{array}{r} 2 \\ + 2 \\ \hline \end{array}$$



$$\begin{array}{r} 1 \\ + 2 \\ \hline \end{array}$$

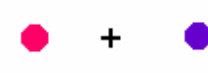

$$\begin{array}{r} 2 \\ + 3 \\ \hline \end{array}$$



$$\begin{array}{r} 4 \\ + 2 \\ \hline \end{array}$$

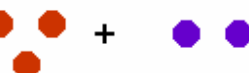

$$\begin{array}{r} 4 \\ + 3 \\ \hline \end{array}$$



$$2 + 3 = \underline{\quad}$$


$$2 + 0 = \underline{\quad}$$


$$1 + 1 = \underline{\quad}$$


$$3 + 1 = \underline{\quad}$$


$$3 + 2 = \underline{\quad}$$


$$4 + 1 = \underline{\quad}$$